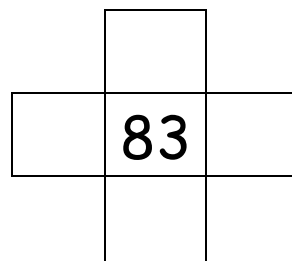
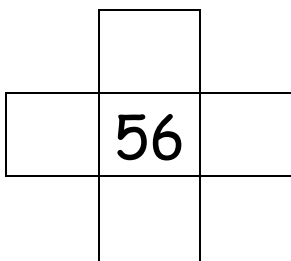
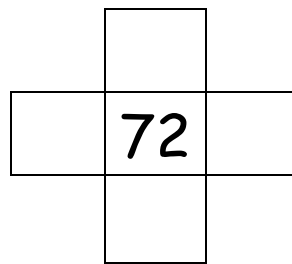
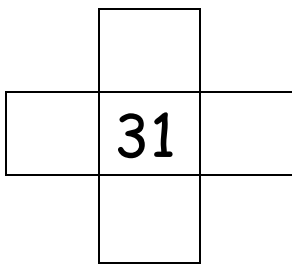
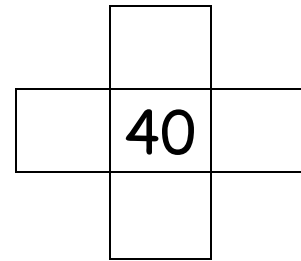
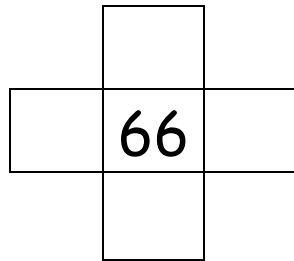
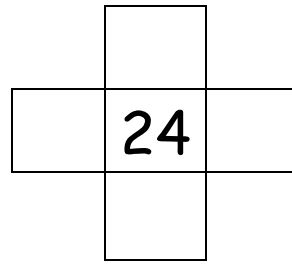
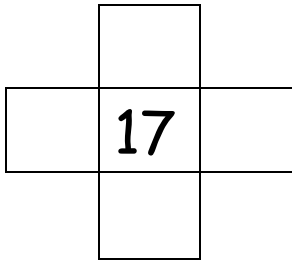


Date _____

Fill in the missing numbers

1	2		4		6		8		10
11	12		14		16	17		19	20
21		23		25	26		28		30
31	32		34		36	37		39	
41		43	44		46	47		49	
	52	53		55	56		58	59	
61		63		65	66		68		70
71	72		74		76		78		80
	82	83		85		87		89	
91		93		95		97		99	





Choose your own number and then write what is 1 more and 1 less, then 10 more and 10 less.

